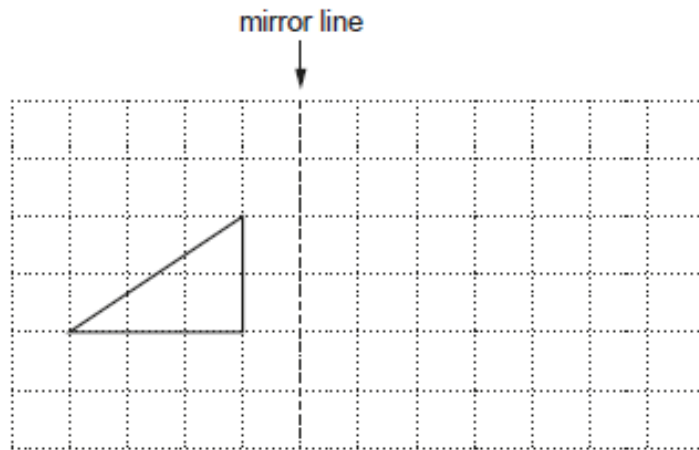


**GCSE Mathematics - Paper 1 (Foundation tier)**  
**J560/01** Paper 1 Mathematics (Foundation tier)

**Question Set 6**

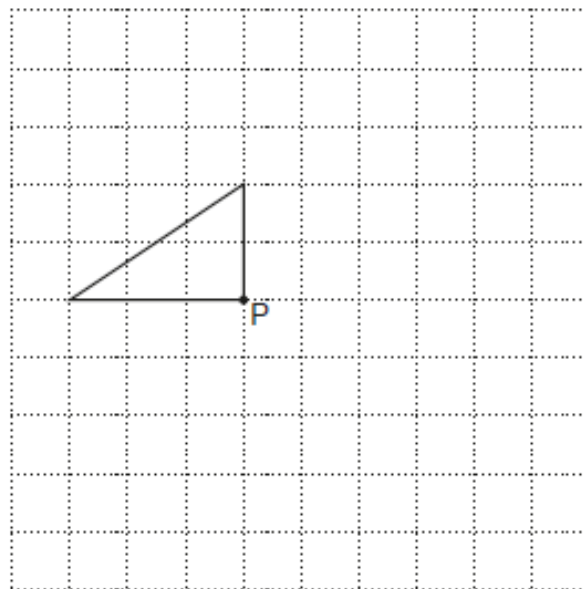
1

(a) Reflect the triangle in the mirror line.



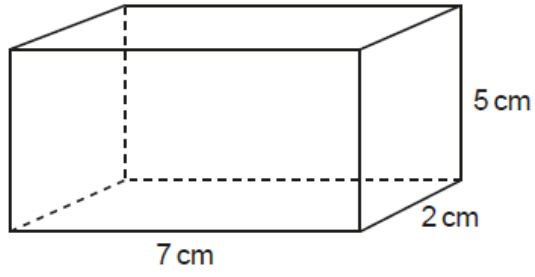
[2]

(b) Rotate the triangle  $90^\circ$  clockwise about the point P.



[2]

2 Work out the volume of this cuboid.

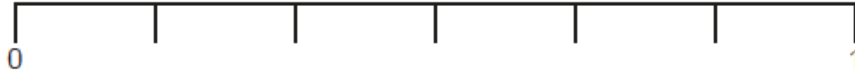


..... cm<sup>3</sup> [2]

- 3 A bag contains 12 counters.  
6 are red, 4 are blue and 2 are yellow.  
A counter is taken from the bag at random.

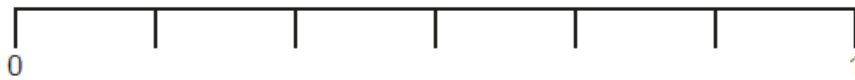
Mark with an arrow ( $\downarrow$ ) the probability the counter is

(a) red,



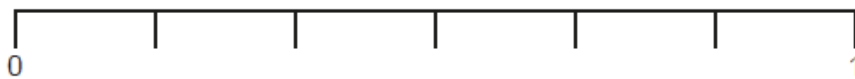
[1]

(b) yellow,



[1]

(c) green.



[1]

4 (a) Divide 72 in the ratio 4 : 5.

(a) ..... : ..... [2]

(b) In one year, Clara and Dave borrowed books from a library in the ratio 3 : 7.  
Dave borrowed 35 books.

Work out the number of books borrowed by Clara.

(b) ..... [2]

5 Yoghurts are packed in trays.  
Each tray holds 12 yoghurts.

What is the smallest number of trays needed to pack 460 yoghurts?

..... [2]

6 The scale on a map is 1 : 50 000.

How many kilometres on the ground are represented by 8 cm on the map?

..... km [3]

7 Choose a word from this list that best describes each statement.

Identity      Expression      Formula      Term      Equation

(a)  $8 = n + 2$       (a) ..... [1]

(b)  $3x + 2y$       (b) ..... [1]

(c)  $(a + b)(a - b) = a^2 - b^2$       (c) ..... [1]

- 8 Harry is paid £8.60 per hour for the first 30 hours he works each week.  
After 30 hours he is paid  $1\frac{1}{2}$  times the hourly rate.

Last week, Harry worked for 33 hours.

He was also paid a bonus of  $\frac{1}{10}$  of his earnings for that week.

Calculate how much Harry was paid in **total** last week.

£ ..... [6]

9 (a) Solve.

$$\frac{x}{2} + 5 = 15$$

(a)  $x = \dots\dots\dots$  [2]

(b) Factorise.

$$5a^2 - 10a$$

(b)  $\dots\dots\dots$  [2]

(c) Solve by factorising.

$$x^2 + 15x + 56 = 0$$

(c)  $x = \dots\dots\dots$  or  $x = \dots\dots\dots$  [3]

10 The height,  $h$ , of a lorry is 4.3 metres, correct to 1 decimal place.

Complete the error interval for the height,  $h$ .

$\dots\dots\dots \leq h < \dots\dots\dots$  [2]



11 A triangle has sides of length 14.1 cm, 14.8 cm and 19.5 cm.

Is this a right-angled triangle?  
Show how you decide.

..... because .....  
..... [4]

12 One morning Kai records the colour of the cars passing his house.  
He then works out the relative frequency of each colour.  
Some of his results are shown in this table.

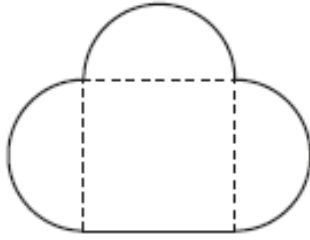
Colour	Silver	Red	Green	Black	Other
Relative frequency		0.16	0.10	0.24	0.32

The following morning, Kai is going to record the colour of the first 200 cars to pass his house.

Work out an estimate for the total number of cars, coloured silver or red, that he should expect to see.

..... [4]

- 13 The diagram shows Jane's lawn.  
It is in the shape of a square of side 36 m and three semi-circles.



Not to scale

She is going to spread fertiliser on the lawn at a rate of 30 g per square metre.  
The fertiliser is only sold in 10 kg bags costing £15.80 each.

Calculate the cost of buying the bags of fertiliser for her lawn.  
You must show all your working.

£..... [6]

**Total Marks for Question Set 6: 50**

---

# OCR

Oxford Cambridge and RSA

## **Copyright Information**

OCR is committed to seeking permission to reproduce all third-party content that it uses in its assessment materials. OCR has attempted to identify and contact all copyright holders whose work is used in this paper. To avoid the issue of disclosure of answer-related information to candidates, all copyright acknowledgements are reproduced in the OCR Copyright Acknowledgements Booklet. This is produced for each series of examinations and is freely available to download from our public website ([www.ocr.org.uk](http://www.ocr.org.uk)) after the live examination series.

If OCR has unwittingly failed to correctly acknowledge or clear any third-party content in this assessment material, OCR will be happy to correct its mistake at the earliest possible opportunity.

For queries or further information please contact The OCR Copyright Team, The Triangle Building, Shaftesbury Road, Cambridge CB2 8EA.

OCR is part of the Cambridge Assessment Group; Cambridge Assessment is the brand name of University of Cambridge Local Examinations Syndicate (UCLES), which is itself a department of the University of Cambridge